

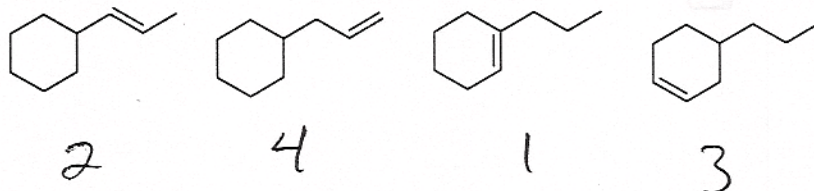
JASPERSE CHEM 350 TEST 3 VERSION 3

Ch. 7 Structure and Synthesis of Alkenes

Ch. 8 Reactions of Alkene

The number of points per problem is indicated in parentheses following each problem.

1. Rank the following alkenes in order of stability, 1 being most stable, 4 being least stable. (4)

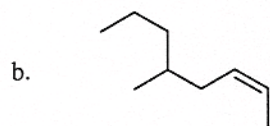
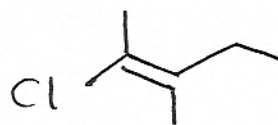


2. Determine the number of elements of unsaturation for  $C_5H_7ClO$ . (3)

$$EU = 2$$

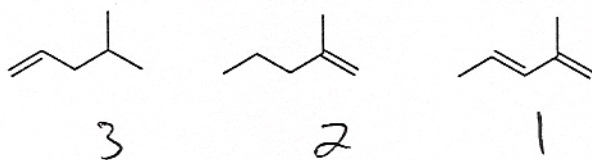
3. Give the proper IUPAC name or the structure for the following compounds. (4 points each)

- a. (E)-2-chloro-3-methyl-2-pentene



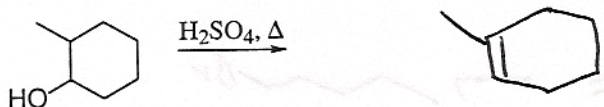
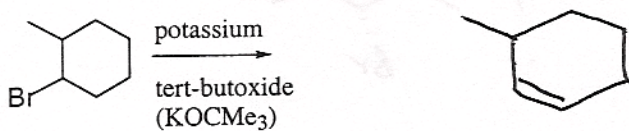
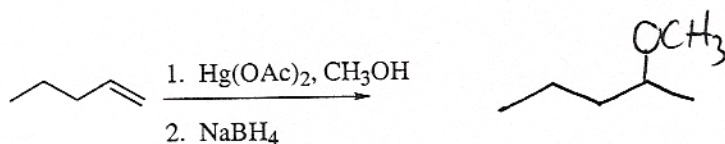
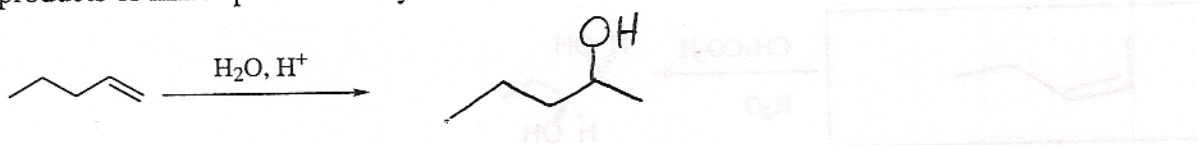
cis-5-methyl-2-octene  
or Z-

4. Rank the reactivity of the following alcohols towards HBr, 1 being the fastest reactant, 3 being the slowest reactant. (3 points)

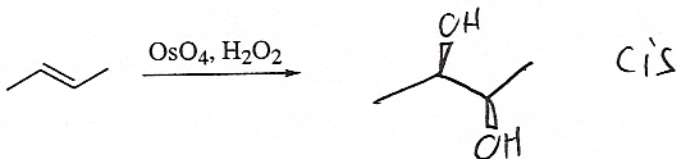
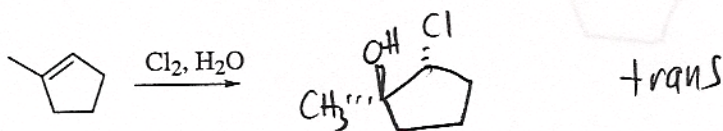
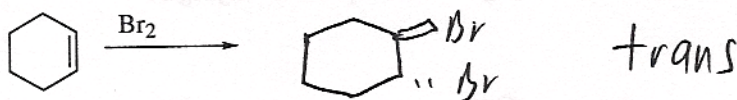
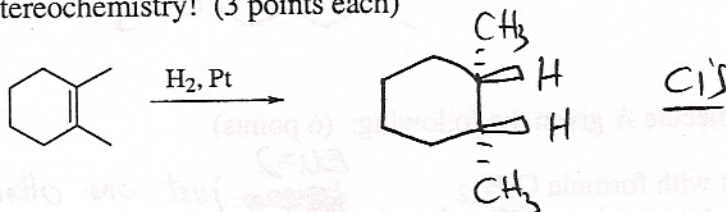


Cation stability

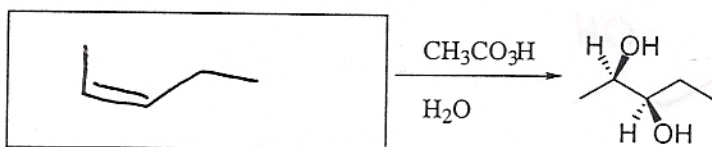
5. Predict the major product for the following reactions. You needn't bother to show any side products or minor products. Pay careful attention to orientation. (3 points each)



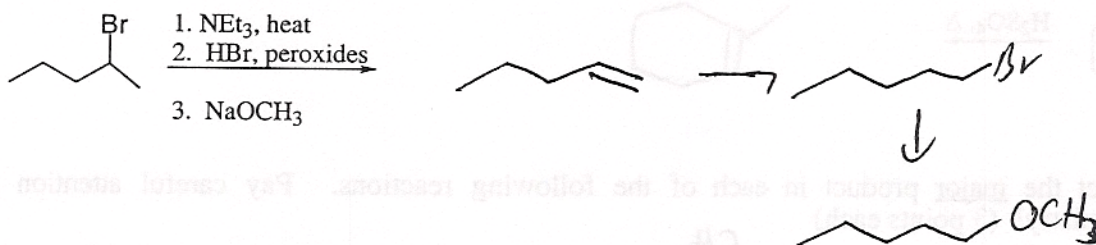
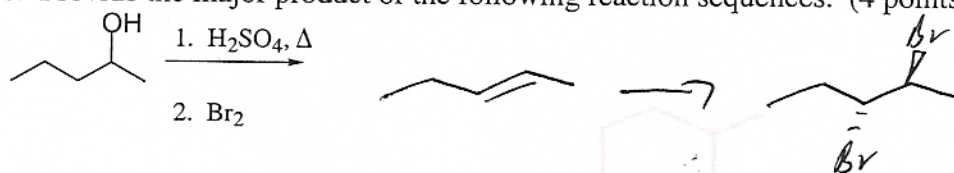
6. Predict the major product in each of the following reactions. Pay careful attention to stereochemistry! (3 points each)



7. Fill in the starting reactant. (4 points each)



8. Provide the major product of the following reaction sequences. (4 points each)

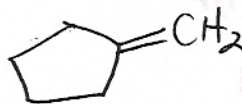


9. What is a possible structure for a molecule A given the following: (6 points)

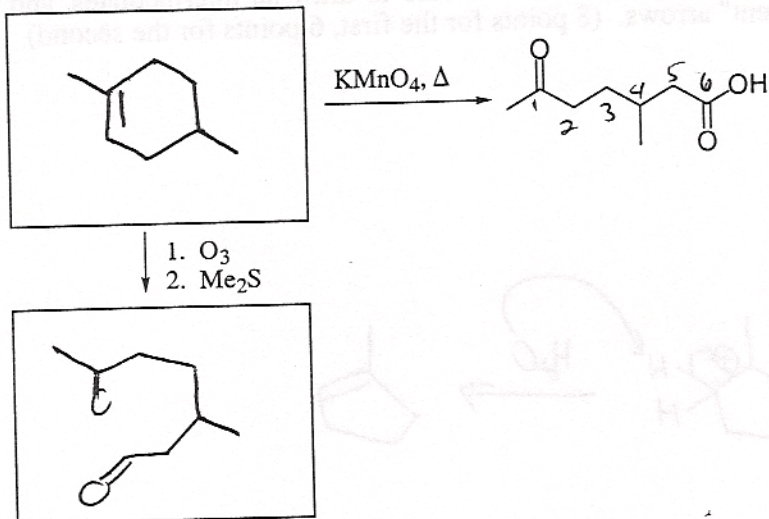
a. is has the formula  $C_6H_{10}$

b. it reacts with  $H_2/Pt$  to give a product with formula  $C_6H_{12}$

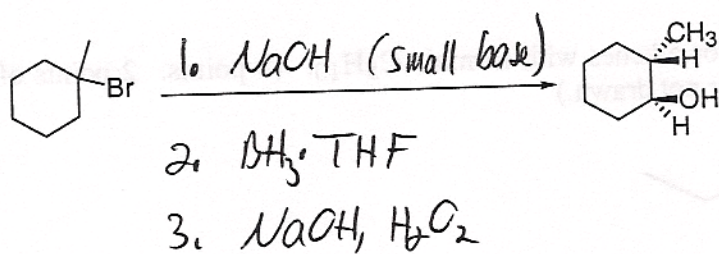
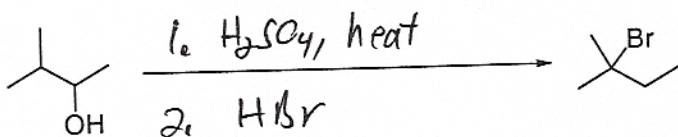
c. upon ozonolysis ( $O_3; Me_2S$ ) it gives two products,  $CH_2=O$  and a product  $C_5H_8O$ .




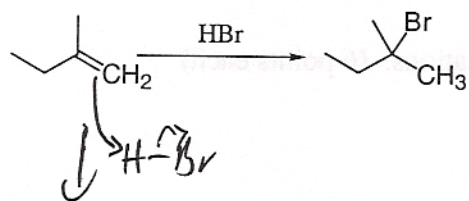
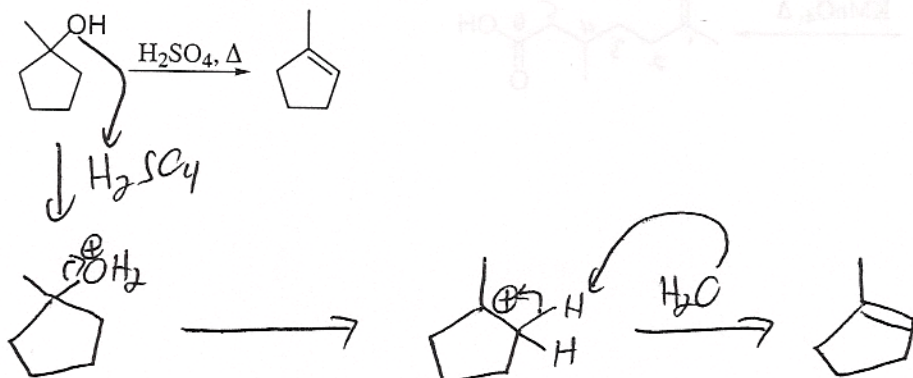
10. Fill in the boxes. (6 points total)



11. Provide reagents to accomplish the following transformations. (6 points each)



12. Draw the mechanisms for the following reactions. Be sure to draw all intermediates, and try to correctly draw "electron-movement" arrows. (8 points for the first, 6 points for the second)



13. Draw as many isomers as you can for alkenes with formula  $\text{C}_5\text{H}_{10}$ . (8 points. 2 points off for each duplicate or each possible isomer not drawn.)

